































FP ARRAY HOORAY - Match the multiplication fact to the array

Choose a multiplication fact to match the arrays. Then say how many altogether in each array.

4×3	4×2	3×4	2×2	4×5
5×3	3×2	5×4	2×4	5×2
2×5	4×4	2×3	5×5	3×5

Fact	How many?	Fact	How many?	Fact	How many?	Fact	How many?
							
Fact	How many?	Fact	How many?	Fact	How many?	Fact	How many?
							
Fact	How many?	Fact	How many?	Fact	How many?	Fact	How many?
							
Fact	How many?	Fact	How many?	Fact	How many?	Fact	How many?
							

FP ARRAY HOORAY - Use the arrays to write different types of facts.

This array shows...	Write an addition fact for this array	Write a multiplication fact for this array	Write another multiplication fact for this array	Show how to split the array into equal parts
<p>EXAMPLE</p>  <p>3 rows x 5 columns</p>	$3 + 3 + 3 + 3 + 3 = 15$	$3 \times 5 = 15$	$5 \times 3 = 15$	 <p>Split into 3 equal parts</p>
 <p>___ rows x ___ columns</p>				 <p>Split into 4 equal parts</p>
 <p>___ rows x ___ columns</p>				 <p>Split into 6 equal parts</p>
 <p>___ rows x ___ columns</p>				 <p>Split into 4 equal parts</p>
 <p>___ rows x ___ columns</p>				 <p>Split into 2 equal parts</p>
 <p>___ rows x ___ columns</p>				 <p>Split into 2 equal parts</p>
 <p>___ rows x ___ columns</p>				 <p>Split into 2 equal groups</p>