



Addition & subtraction strategies



Work with a partner.  
Look at each sum. Work out different ways of finding an answer


$19-6$	$16-4$	$25-2$	SANC Maths Clubs
$19-8$	$24-3$	$17-4$	
$18-5$	$16-5$	$23-2$	

Addition & subtraction strategies



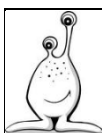
Work with a partner.  
Look at each sum. Work out different ways of finding an answer

$7+8$	$5+6$	$6+7$	SANC Maths Clubs
$4+5$	$10+11$	$8+7$	
$12+13$	$11+12$	$8+9$	



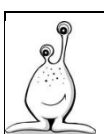
Work with a partner.  
Look at each sum. Work out different ways of finding an answer

$8+11$	$6+12$	$12+6$	SANC Maths Clubs
$7+21$	$13+6$	$16+3$	
$22+15$	$5+14$	$23+16$	



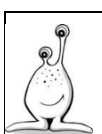
Work with a partner.  
Look at each sum. Work out different ways of finding an answer

$9+1$	$9+2$	$9+3$	SANC Maths Clubs
$9+6$	$9+7$	$19+1$	
$19+4$	$19+3$	$19+5$	



Work with a partner.  
Look at each sum. Work out different ways of finding an answer

$10+12$	$15+10$	$20+12$	SANC Maths Clubs
$17+10$	$10+15$	$27+12$	
$27-15$	$35-12$	$45-23$	



Work with a partner.  
Look at each sum. Work out different ways of finding an answer

$6+4$	$7-5$	$3+7$	SANC Maths Clubs
$16+4$	$17-5$	$13+7$	
$26+5$	$27-5$	$33+7$	