

MONEY FUN BOOKLET



NAME: _____

CLASS: _____

YEAR: _____







How much altogether?

R _____ , _____



What is the value of these numbers of coins?

Complete the tables

	3 coins	4 coins	6 coins	10 coins	11 coins	20 coins
	15c					
				100c		
						
						

Write the value of the money in rand (1)

Example:



R6,60

Source 1: <http://www.homeschoolmath.net/worksheets/south-african-money.php>









Write the value of the money in rand (2)

Example:





R20,50



































	
	
	
	
	
	
	
	

Source 2: <http://www.homeschoolmath.net/worksheets/south-african-money.php>

Write the value of the money in rand (3)

Example:

			R 75,00
-----------------------------------------------------------------------------------	-----------------------------------------------------------------------------------	-----------------------------------------------------------------------------------	----------------

Source 3: <http://www.homeschoolmath.net/worksheets/south-african-money.php>

Join the coins

Count the value of the coins, then use a line to join them to the larger coin



Money number lines

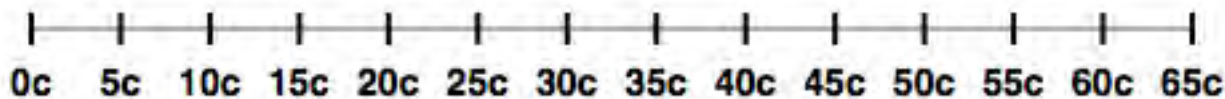
Use the number lines to count in different money values. Write a sum for each.



YOUR SUM: for example

$$3 \times 20c = 60c$$

Jump in 20c coins to make 60c. How many jumps?



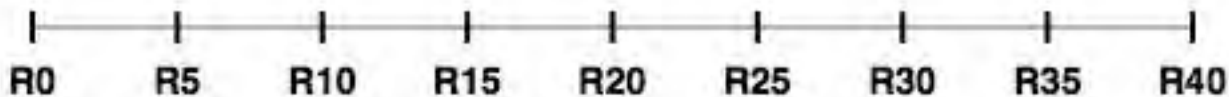
YOUR SUM:

Jump in 25c coins to get to 175c. How much is 175c in Rand?



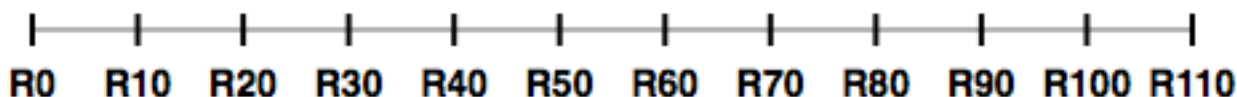
YOUR SUM:

Jump in R5 coins to make R35. How many jumps?




YOUR SUM:

Jump in R20 notes to get to R100. How many jumps?












YOUR SUM:

Jump in R50 notes to get to R150. How many jumps?



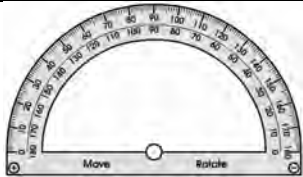

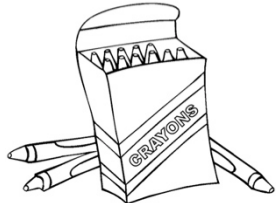















How much do you have?

Work out the money you have	You spend	What do you have left?
	R1,20	R0,30
	R1,40	
	R6,20	
	R2,50	
	R3,50	
	R0,75	
	R15,00	
	R15,10	
	R95,00	




























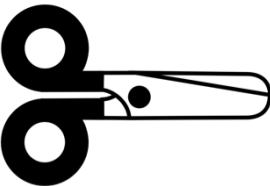




How much is left?

Cross out the coins and notes you need to buy the item. How much money is left? Check the example given.

 <p>R19,45</p>  <p>How much is left?</p> <p>5c</p>	 <p>R6,20</p>  <p>How much is left?</p>	 <p>R17,35</p>  <p>How much is left?</p>
 <p>R11,25</p>  <p>How much is left?</p>	 <p>R7,20</p>  <p>How much is left?</p>	 <p>R5,75</p>  <p>How much is left?</p>
 <p>R27,45</p>  <p>How much is left?</p>	 <p>R1,30</p>  <p>How much is left?</p>	 <p>R2,50</p>  <p>How much is left?</p>








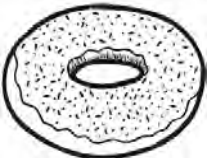
Source 4: http://www.mathmammoth.com/preview/SA_Money_Rand.pdf

How much more do you need?

Item	costs	you have	How much more do you need?
	R6,50	  R5,50	R1,00
	R1,30	 	
	R5,00	 	
	70c	 	
	R3,50		
	R4,00	  	
	R2,50	   	
	R11,00	  	
	R5,50	   	

How many can I buy?

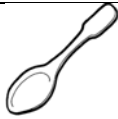

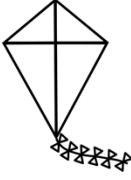





Your mother gives you R10 to buy something to eat. How many of **each** could you buy with R10?

Item	Each	How many can I buy for R10? Show your workings	Is money left over? How much?
 Sweet	50c		
 Juice	R3.00		
 Lollipop	R2.50		
 Chocolate bar	R1.25		
 Apple	40c		
 Pear	75c		
 Fries	R5.50		
 Doughnut	R3.25		

Expensive and Cheaper



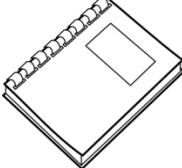




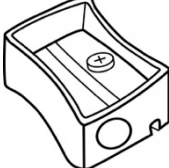
Expensive: Which costs more?

TICK the item that costs more. Then work out **how much** more

		How much more?
 <p>R3,00</p>	 <p>R5,00 ✓</p>	The fork costs R2 more
 <p>R3,30</p>	 <p>R3,80</p>	
 <p>R12,00</p>	 <p>R11,05</p>	
 <p>R1,90</p>	 <p>R1,95</p>	

Cheaper: Which costs less?

TICK the item that costs less. Then work out **how much** less

		How much less?
 <p>R5,00</p>	 <p>R3,00 ✓</p>	The spoon costs R2 less
 <p>R4,00</p>	 <p>R1,90</p>	
 <p>R5,50</p>	 <p>R2,50c</p>	
 <p>R10</p>	 <p>R4,50</p>	

Source 5: <http://www.south-african-homeschool-curriculum.com/support-files/sa-money-worksheets.pdf>

Food Shopping

You have family coming to visit. Your father gives you a shopping list and the list of specials from the supermarket. **ESTIMATE** how much money will he need to go shopping? Show your workings.

Shopping list

<p>Joko teabags</p> <p>Smooth peanut butter</p> <p>2 packets of Fish Fingers</p> <p>2L Sunflower seed oil</p>	<p>2 boxes of OTEES cereal</p> <p>4 tins of Chakalaka</p> <p>1kg of frozen Mixed vegetables</p> <p>1kg American Style Fries</p>
-------------------------------------------------------------------------------------------------------------------------------------------	-------------------------------------------------------------------------------------------------------------------------------------------------------------

Specials

9.99 Koo Chakalaka Assorted Each (41g)
16.89 Mrs Ball's Chutney Assorted Each (47g)
17.99 Wellington's Sweet Chili Sauce (500ml)
18.89 Crosse & Blackwell Mayonnaise Assorted (750g/700g each)
19.99 Nando's Sauce Assorted (250ml each)
19.99 Denny Cook-in-Sauce/Curry Sauce Assorted (400g each)
26.89 Housebrand Sunflower Seed Oil (2L)

21.99 Joko Tagless Teabags (100 per pack)
21.99 Bokomo Otees Cereal Assorted Each (37g)
24.99 Bokomo ProNutro Cereal Assorted (500g each)
28.99 Bokomo Weet-Bix (900g)
34.99 "Yum Yum" Peanut Butter Assorted (800g each)
36.99 Kellogg's Corn Flakes (1kg)

8.49 Today Puff Pastry (400g)
18.99 Nature's Garden American Style Fries (1kg)
22.99 McCain Stir Fry Assorted Each (1kg)
22.99 McCain Mixed Veg (1kg)
39.99 County Fair Frozen Chicken Braaiscuts (2kg)
99.99 County Fair Frozen Chicken Braaiscuts (5kg)

24.99 Today Burger Patties Assorted Each (800g)
25.99 County Fair Chicken Steaklets Assorted Each (400g)
27.99 Fry's Meat Free Traditional Sausages (500g)
29.99 Pieman's Frozen Pies Assorted (4 per pack)
32.99 Sea Harvest Fish Fingers (800g)
32.99 I&J Out 'O The Oven Assorted Each (400g)
34.99 Today Sausage Rolls Assorted (30 per pack)
37.99 I&J Deep Water Hake Prime Medallions (450g)